




April Homework



Monday	Tuesday	Wednesday	Thursday
<p>Solve the word problems. You may draw objects to help you find the answer.</p> <p><input type="checkbox"/> razkids or <input type="checkbox"/> sight words</p>	<p>Write 3 adjectives that describe you. Illustrate each adjective that you listed.</p> <p><input type="checkbox"/> razkids or <input type="checkbox"/> sight words</p>	<p>Solve the addition problems.</p> <p><input type="checkbox"/> razkids or <input type="checkbox"/> sight words</p>	<p>Informational writing: Tell me what you know about an animal that lives on a farm.</p> <p><input type="checkbox"/> razkids or <input type="checkbox"/> sight words</p>
<p>Fill in the partners (two numbers that add up to make a larger number) for each number.</p> <p><input type="checkbox"/> razkids or <input type="checkbox"/> sight words</p>	<p>Read a book. Write a question you have about the book you just read. Use a question mark.</p> <p><input type="checkbox"/> razkids or <input type="checkbox"/> sight words</p>	<p>Solve the word problems. You may draw objects to help you find the answer.</p> <p><input type="checkbox"/> razkids or <input type="checkbox"/> sight words</p>	<p>Write a sentence with each word given.</p> <p><input type="checkbox"/> razkids or <input type="checkbox"/> sight words</p>
<p>Solve the word problems. You may draw objects to help you find the answer.</p> <p><input type="checkbox"/> razkids or <input type="checkbox"/> sight words</p>	<p>Write each spring word in the correct box.</p> <p><input type="checkbox"/> razkids or <input type="checkbox"/> sight words</p>	<p>Solve the subtraction problems.</p> <p><input type="checkbox"/> razkids or <input type="checkbox"/> sight words</p>	<p>Fact vs. opinion writing: Write one fact and one opinion about rain.</p> <p><input type="checkbox"/> razkids or <input type="checkbox"/> sight words</p>
<p>Solve the addition and subtraction problems.</p> <p><input type="checkbox"/> razkids or <input type="checkbox"/> sight words</p>	<p>Complete the spring word hunt by finding & circling each word from the bank in the puzzle.</p> <p><input type="checkbox"/> razkids or <input type="checkbox"/> sight words</p>	<p>Fill in the partners (two numbers that add up to make a larger number) for each number.</p> <p><input type="checkbox"/> razkids or <input type="checkbox"/> sight words</p>	<p>Narrative Writing: Write a story about something you once did in the spring.</p> <p><input type="checkbox"/> razkids or <input type="checkbox"/> sight words</p>

Monday: Solve the word problems. You may draw objects to help you find the answer.

My brother and I caught 8 snakes. My brother caught 5. How many did I catch?

My mom made 10 cookies. She gave my sister 4 and gave the rest to me. How many did she give me?

Tuesday: Write 3 adjectives that describe you. Illustrate each adjective that you listed. Remember, adjectives are describing words.

Wednesday: Solve the addition problems

$4 + 2 =$

$6 + 3 =$

$5 + 5 =$

$4 + 3 =$

$2 + 2 =$

$7 + 3 =$

$5 + 1 =$

$7 + 0 =$

$9 + 1 =$

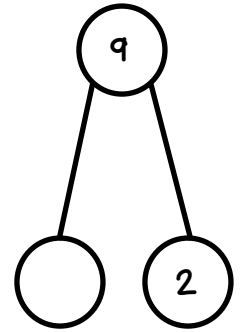

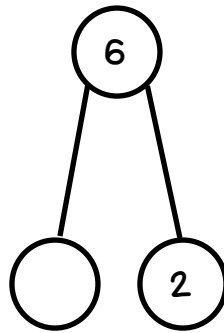
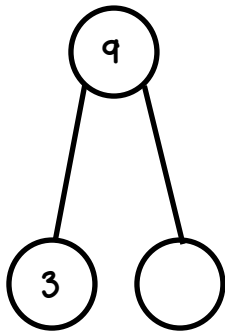
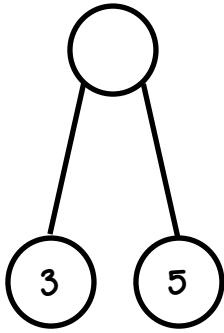
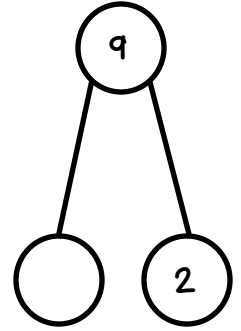

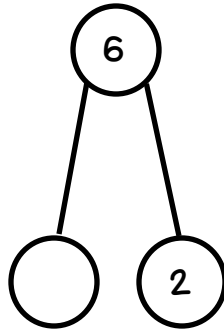
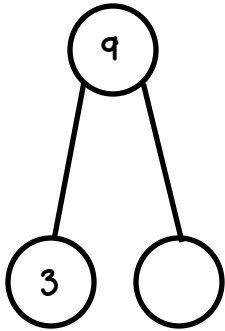
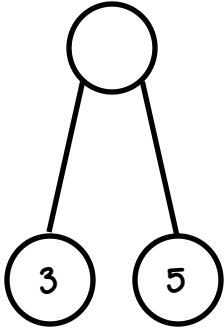
$6 + 2 =$

$3 + 1 =$

$5 + 4 =$

Thursday: Informational writing: Tell me what you know about any farm animal.

Monday: Fill in the partners (numbers that add up to make a larger number).



Tuesday: Read a book. Write a question you have about that book. Use a question mark.

Handwriting practice lines consisting of ten horizontal dashed lines.

Wednesday: Solve the word problems. You may draw objects to help you find the answer.

My dog buried some bones. I found 5 and my dad found 4 of them. How many bones did my dog bury?

My mom made a pie. If the pie is cut into 4 pieces, how many pieces will my brother and I get if we share the pie equally?

Thursday: Write a sentence with each word given.

umbrella:

oviparous:

farm:

Monday: Solve the word problems. Draw objects to help you find the answer.

I had 10 cats. Some of them are black. 4 have stripes. How many are black?

I had 6 popsicles, but 3 of them melted. How many popsicles do I have now?

Tuesday: Write each spring word in the correct box.

word bank

kite

flower

Easter

basket

bunny

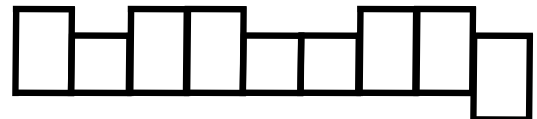
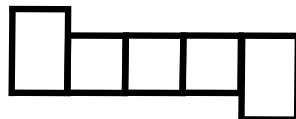
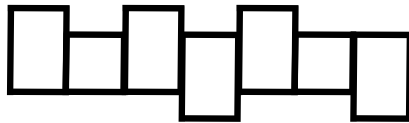
egg

chick

hatch

butterfly

ladybug



Wednesday: Solve the subtraction problems

$4 - 2 =$

$6 - 3 =$

$5 - 5 =$

$4 - 3 =$

$2 - 2 =$

$7 - 3 =$

$5 - 1 =$

$7 - 0 =$

$9 - 1 =$

$6 - 5 =$

$3 - 1 =$

$8 - 4 =$

Thursday: Fact vs. opinion writing: Write one fact and one opinion about rain.

Monday: Solve the addition and subtraction problems.

$8 + 2 =$

$6 - 3 =$

$5 + 3 =$

$10 - 3 =$

$7 + 2 =$

$7 - 4 =$

$5 + 2 =$

$7 - 1 =$

$6 + 1 =$

$8 - 3 =$

$3 + 4 =$

$5 - 0 =$

Tuesday: Complete the word hunt by finding & circling each spring word.

word bank

kite

flower

Easter

basket

bunny

egg

chick

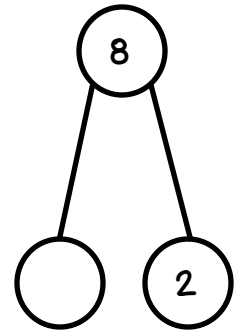
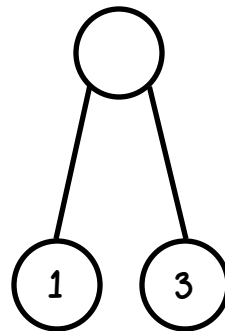
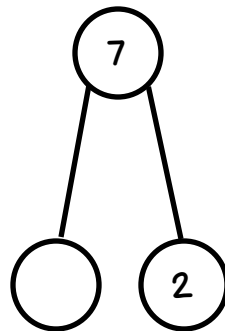
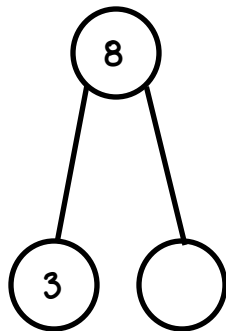
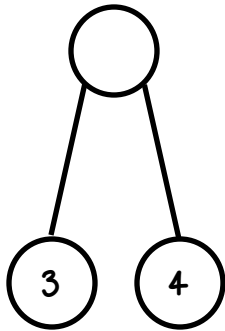
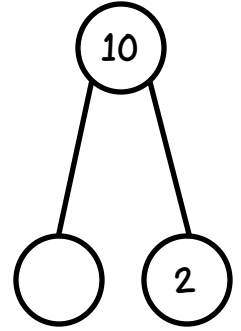
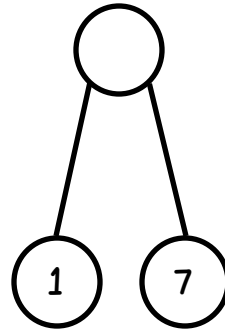
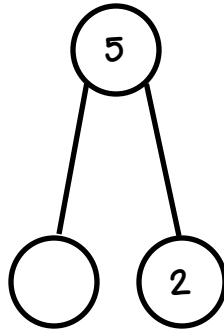
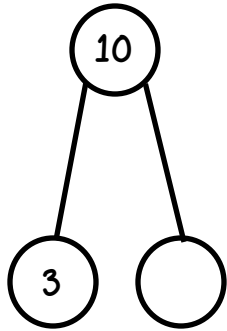
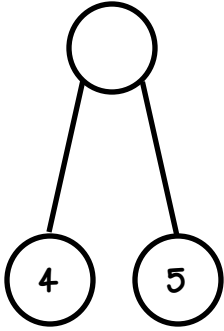
hatch

butterfly

ladybug

l	a	d	y	b	u	g	n	o	v	u	b
v	w	j	k	b	m	p	s	n	o	e	u
b	f	o	m	c	l	q	m	p	w	g	n
a	x	i	t	f	l	o	w	e	r	g	n
s	y	h	a	t	c	h	z	a	n	c	y
k	m	k	r	e	l	l	a	s	d	f	e
e	z	i	f	f	j	s	x	t	g	h	i
t	k	t	a	i	n	s	w	e	l	m	w
q	a	e	b	u	t	t	e	r	f	l	y
p	b	c	h	i	c	k	d	e	r	y	x

Wednesday: Fill in the partners (numbers that add up to make a larger number).



Thursday: Narrative writing: Write a story about something you once did in the spring.
