


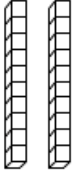

Name _____

March Homework



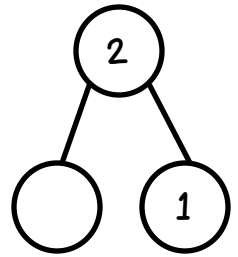
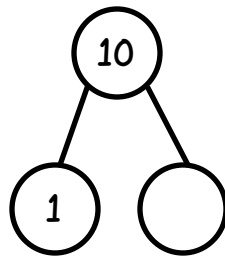
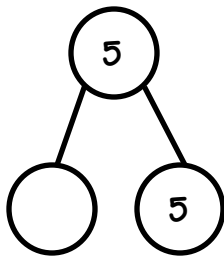
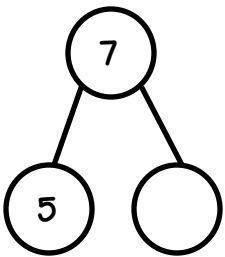
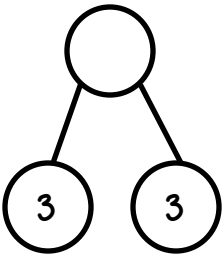
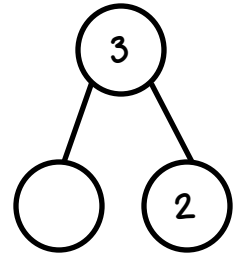
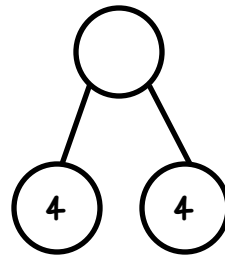
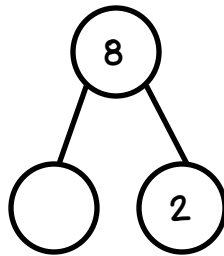
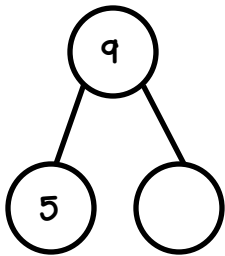
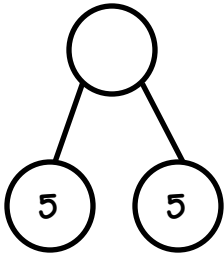
Monday	Tuesday	Wednesday	Thursday
<p>Fill in the chart with the number of tens & ones.</p> <p><input type="checkbox"/> razkids or <input type="checkbox"/> sight words</p>	<p>Write 3 verbs. Illustrate each verb you listed.</p> <p><input type="checkbox"/> razkids or <input type="checkbox"/> sight words</p>	<p>Write a number that is larger than each number given.</p> <p><input type="checkbox"/> razkids or <input type="checkbox"/> sight words</p>	<p>Informational writing: Tell me what you know about weather.</p> <p><input type="checkbox"/> razkids or <input type="checkbox"/> sight words</p>
<p>Fill in the partners (two numbers that add up to make a larger number) for each number.</p> <p><input type="checkbox"/> razkids or <input type="checkbox"/> sight words</p>	<p>Complete each word with the missing letters: ve, ck, ss or er.</p> <p><input type="checkbox"/> razkids or <input type="checkbox"/> sight words</p>	<p>Write a number that is smaller than each number given.</p> <p><input type="checkbox"/> razkids or <input type="checkbox"/> sight words</p>	<p>Write a sentence with each word given.</p> <p><input type="checkbox"/> razkids or <input type="checkbox"/> sight words</p>
<p>Solve the word problems. You may draw objects to help you find the answer.</p> <p><input type="checkbox"/> razkids or <input type="checkbox"/> sight words</p>	<p>Sound out each word by writing the letters you hear on the lines.</p> <p><input type="checkbox"/> razkids or <input type="checkbox"/> sight words</p>	<p>Write any number that comes between the two numbers.</p> <p><input type="checkbox"/> razkids or <input type="checkbox"/> sight words</p>	<p>Opinion writing: Which would you prefer? A magic genie lamp or a leprechaun's pot of gold? Why?</p> <p><input type="checkbox"/> razkids or <input type="checkbox"/> sight words</p>
<p>Solve the subtraction problems. Write your answer on the line.</p> <p><input type="checkbox"/> razkids or <input type="checkbox"/> sight words</p>	<p>Complete the weather word hunt by finding & circling each word from the bank in the puzzle.</p> <p><input type="checkbox"/> razkids or <input type="checkbox"/> sight words</p>	<p>Solve the subtraction problems. Write your answer under the line.</p> <p><input type="checkbox"/> razkids or <input type="checkbox"/> sight words</p>	<p>Narrative Writing: If you were a leprechaun, where would you hide your gold? Why?</p> <p><input type="checkbox"/> razkids or <input type="checkbox"/> sight words</p>

Monday: Fill in the chart with the number of tens & ones.

number	tens	ones	number	tens	ones
23			12		
30			7		
19			27		

Tuesday: Write 3 verbs. Illustrate each verb you listed. Remember, verbs are action words.


Monday: Fill in the missing number to make partners.




Tuesday: Complete each word with the missing letters: ve, ck, ss or er



gla__




lo__




de__



ki__



glo__



ro__et

Wednesday: Write a number that is smaller than each number given.

__ 12

__ 15

__ 39

__ 1

__ 21

__ 17

__ 19

__ 4

__ 2

__ 30

__ 10

__ 8

Thursday: Write a sentence with each word given.

shamrock:

leprechaun:

wind:

Monday: Solve the word problems. Draw objects to help you find the answer.

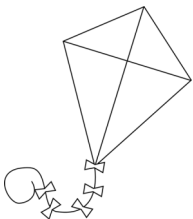
I had 9 pet frogs. 6 hopped to the pond. How many frogs do I have left?

I had 10 butterflies, but 4 of them flew away. How many butterflies do I have now?

Tuesday: Sound out each word by writing the letters you hear on the lines







Wednesday: Write **any** number that comes between the two numbers.

0 _ 5	11 _ 19	20 _ 30
1 _ 7	6 _ 9	9 _ 12
13 _ 17	25 _ 29	18 _ 20

Thursday: Opinion writing: Which would you prefer? A magic genie lamp or a leprechaun's pot of gold? **Why?**

Monday: Solve the subtraction problems. Write your answer on the line.

$8-1=_$

$7-3=_$

$5-2=_$

$3-0=_$

$5-5=_$

$4-2=_$

$9-7=_$

$2-1=_$

$6-3=_$

Tuesday: Complete the word hunt by finding & circling each word from the bank in the puzzle.

word bank

cloud

rain

snow

umbrella

wind

fog

lightning

thunder

sun

s	n	o	w	a	n	o	n	o	v	u	t
v	w	j	k	b	m	p	s	n	o	w	s
u	f	o	g	c	l	q	m	p	w	q	r
t	x	i	l	i	g	h	t	n	i	n	g
s	y	h	l	d	k	r	a	b	n	c	d
u	m	b	r	e	l	l	a	z	d	f	e
n	z	g	f	f	j	s	x	y	g	h	i
j	k	r	a	i	n	s	w	v	l	m	w
q	a	d	e	g	i	c	l	o	u	d	o
p	b	c	t	h	u	n	d	e	r	y	x

Wednesday: Solve the subtraction problems. Write your answer under the line.

8	4	10	5
<u>-2</u>	<u>-4</u>	<u>-6</u>	<u>-3</u>

6	5	8	10
<u>-2</u>	<u>-4</u>	<u>-3</u>	<u>-0</u>

Thursday: If you were a leprechaun, where would you hide your gold? Why?
